



Concept: Length and Perimeter


Skill: I can measure, compare, add and subtract lengths (m/cm/mm).


SMALL STEP: Measure Length (VF) - PURPLE

1. Match each image to its length.


A.  38mm


B.  3cm and 1mm


C.  5cm and 2mm


D.  46mm

2. Match each image to its length.

A.  54mm

B.  37mm

C.  4cm and 3mm

D.  1cm and 6mm

3. Imagine these objects are their usual size and match them to the most suitable length measurement.



lion



helicopter



calculator

24m and 16cm

12cm and 3mm

1m and 98cm



rubber



car



wolf

1m and 43cm

2cm and 84mm

4m and 57cm

5. Tick the length of the flower.



Not drawn to scale

3cm and 7mm 6cm and 8mm

6. Tick the length of the bunting.



Not drawn to scale

9cm and 1mm 7cm and 9mm

7. Complete the sentences below.

The line is cm and mm long.

The line is mm long.

8. Complete the sentences below.

The line is cm and mm long.

The line is mm long.