



Concept: Statistics

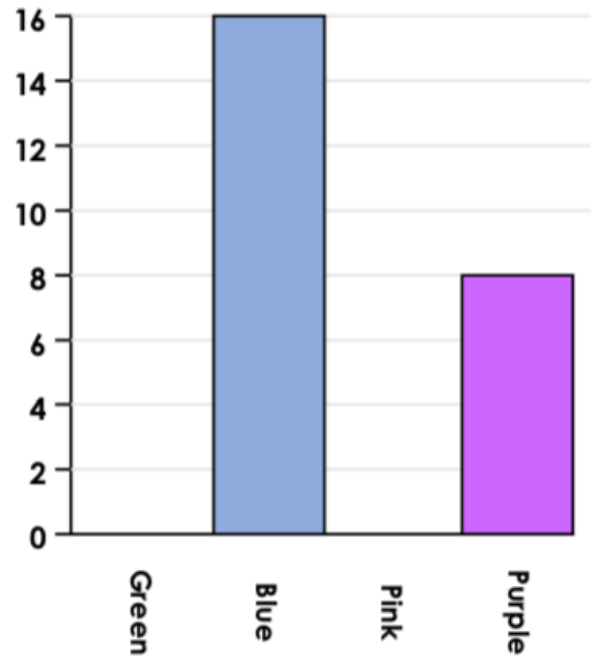
Skill: I can interpret and present data using bar charts, tables and pictograms.

SMALL STEP: Bar Charts (VF) - AMBER

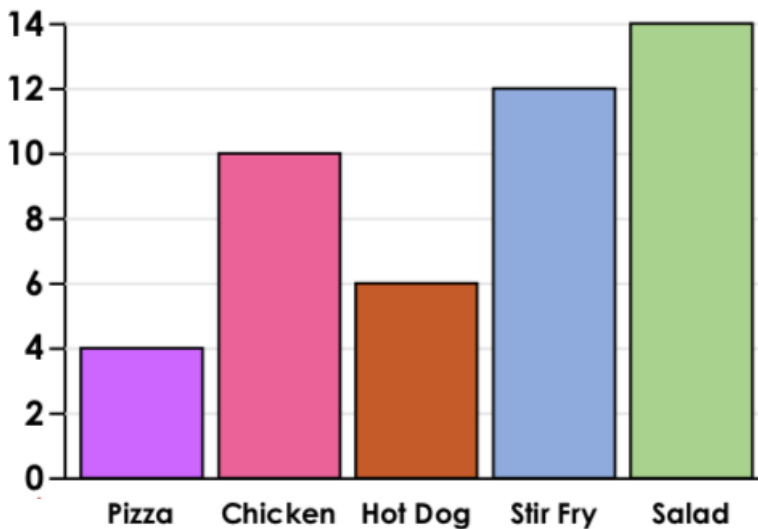
1. Use the information to complete the pictogram and the bar chart.

Colour	Number of children
Green	
Blue	
Pink	
Purple	

1 face = 2 children



2. Use this bar chart to answer the questions about favourite school dinners.



- A. Which dinner is least popular?
- B. How many more children like salad than hot dogs?
- C. How many children like chicken?
- D. How many children are asked in total?

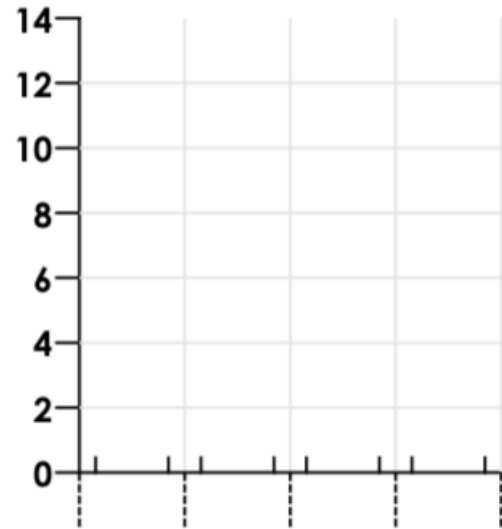
Concept: Statistics

Skill: I can interpret and present data using bar charts, tables and pictograms.

SMALL STEP: Bar Charts (VF) - AMBER

3. Create a bar chart using this tally chart.

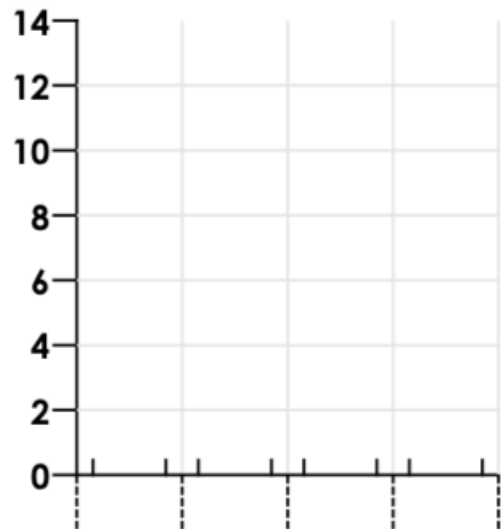
Favourite dessert	Number of children
Fruit	IIII II IIII
Ice cream	IIII III
Cake	IIII II
Yoghurt	IIII I



VF

4. Create a bar chart using this tally chart.

Day	Number of apples sold
Monday	IIII I
Tuesday	IIII II IIII
Wednesday	IIII II
Thursday	IIII



VF