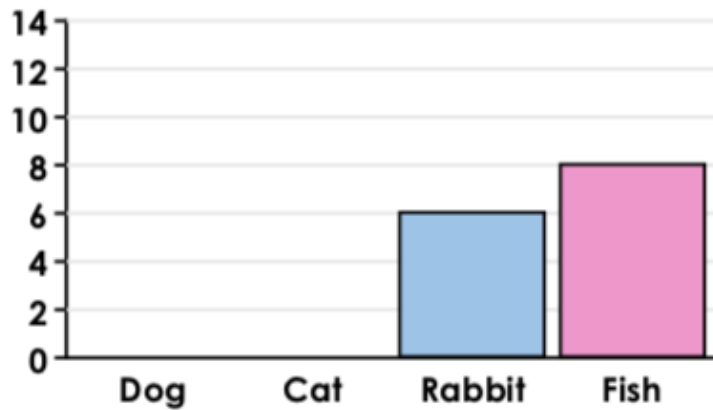


Concept: Statistics

Skill: I can interpret and present data using bar charts, tables and pictograms.

SMALL STEP: Bar Charts (PS) - AMBER

1. The bar chart shows favourite pets.



Fewer children have dogs than cats, but more children have dogs than fish. Complete the bar chart showing how many children could have dogs or cats.

PS



Can you think of two more possibilities and draw the bar charts to show them?

Concept: Statistics

Skill: I can interpret and present data using bar charts, tables and pictograms.

SMALL STEP: Bar Charts (PS) - AMBER

2. A class collects data about pizzas.

Ham		 = 2 children
Cheese		
Tuna		
Veggie		



6 fewer children like veggie than cheese pizzas.

6 more children like cheese than ham pizzas.



Draw a bar chart to display this information. The scale should go up in 2s.

Draw your bar chart below, but take care as you may need to do something else first...