




**Concept: Statistics**

Skill: I can interpret and present data using bar charts, tables and pictograms.

SMALL STEP: Pictograms (VF)

1. Complete the missing sections of the pictogram using the information below.

Transport	Number of Children
Walk	
Bicycle	
Car	
Bus	
Taxi	



Key:  = 3 children


- A. 9 fewer children walk to school than come by car.
- B. Double the number of children who cycle take the bus.
- C. 3 times as many children take the taxi than cycle.

Working out

Working out

2. Complete the missing sections of the pictogram using the information below.

Club	Number of Children
Karate	
Art	
Singing	
Puzzles	
Sewing	

Key:  = 4 children






- A. 6 fewer children go to art club than karate club.
- B. 4 more children go to puzzles club than singing club.
- C. Half the number of children that go to karate club go to sewing club.

**Concept: Statistics**

Skill: I can interpret and present data using bar charts, tables and pictograms.

SMALL STEP: Pictograms (VF)

**3. Answer the questions about the number of cereal boxes sold.**

Cereal	Number of Cereal Boxes
Coco Chips	
Sugar Flakes	
Crunchies	
Wheat Bites	
Bran Hoops	






Key:  = 8 cereal boxes sold


- A. How many boxes of Sugar Flakes were sold?
- B. How many more boxes of Coco Chips were sold than Crunchies?
- C. How many boxes of Bran Hoops and Sugar Flakes were sold?
- D. How many fewer boxes of Wheat Bites were sold compared to Crunchies?

Working out

Working out

**4. Answer the questions about the number of cupcakes sold in a cafe.**

Cupcake	Number of Cupcakes Sold
Carrot	
Lemon	
Chocolate	
Vanilla	
Red velvet	

Key:  = 10 cupcakes sold

- A. How many chocolate cupcakes were sold?
- B. How many fewer carrot cupcakes were sold than lemon cupcakes?
- C. How many red velvet and vanilla cupcakes were sold in total?
- D. How many more chocolate cupcakes were sold than carrot cupcakes?