




Spelling	Arithmetic $7 \times 10 = 60 + \underline{\quad}$	$90 \div 10 = 10 - \underline{\quad}$	$3 \times 5 = 20 - \underline{\quad}$
breathe creature feature repeat treatment			

www.themumeducates.com

Grammar and punctuation

1. Put a tick next to the sentence that should have an **exclamation mark** at the end.

Where is the Post Office

What big eyes you have

The fabric is smooth like silk

He went to Scotland

2. Add either **a** or **an** before the following words.

- _____ book
- _____ fan
- _____ table
- _____ apricot
- _____ elephant


Reasoning

1. A magazine costs 75p.
Sara buys a magazine every week.
How much will she spend on magazine for:

a. three weeks? _____

b. five weeks? _____

c. ten weeks? _____


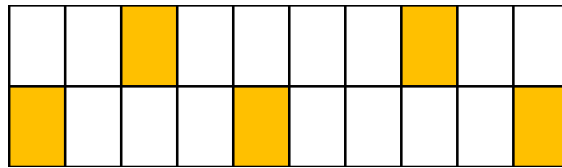


2. Tick the digital clock that show midnight.

12:00

00:00

3. Write shaded fraction and than the simplest form for these shapes.

Shape	shaded fraction	simplest fraction
	_____	_____
	_____	_____