




Add and subtract 100s

1 Brett has some flowers.

Hundreds	Tens	Ones
		

He buys 3 more bunches of these flowers.

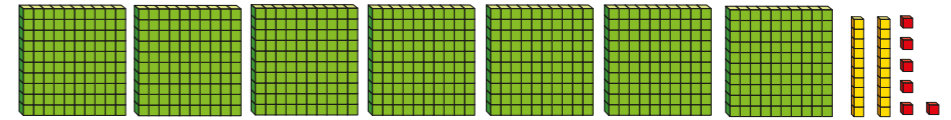
How many flowers does he have now?



Complete the number sentence.

$$\square \bigcirc \square = \square$$

2 Filip makes the number 726



Cross out the hundreds to help you complete the number sentences.

a) $726 - 100 = \square$

c) $726 - 400 = \square$

b) $726 - 200 = \square$

d) $726 - 700 = \square$

3 Complete the number sentences.

a) $400 + 300 = \square$

b) $700 - 200 = \square$

$430 + 300 = \square$

$780 - 200 = \square$

$439 + 300 = \square$

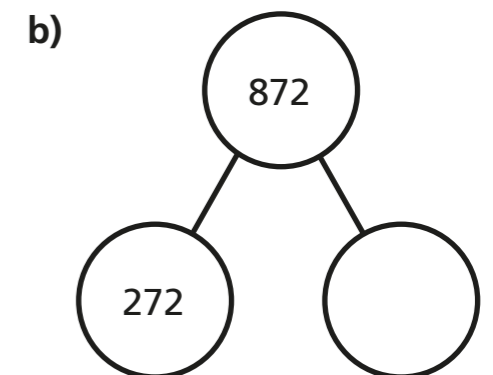
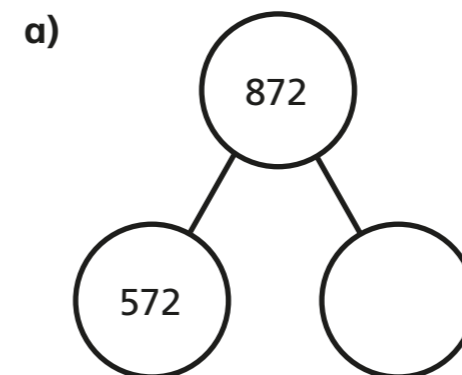
$783 - 200 = \square$

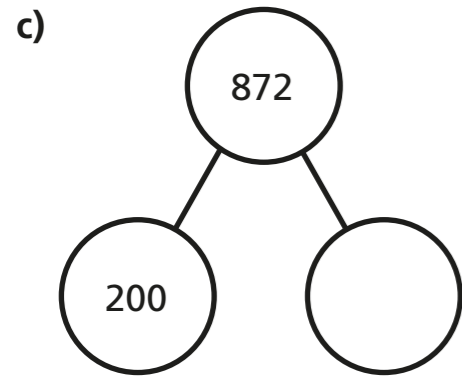
$300 + 477 = \square$

$701 - 200 = \square$

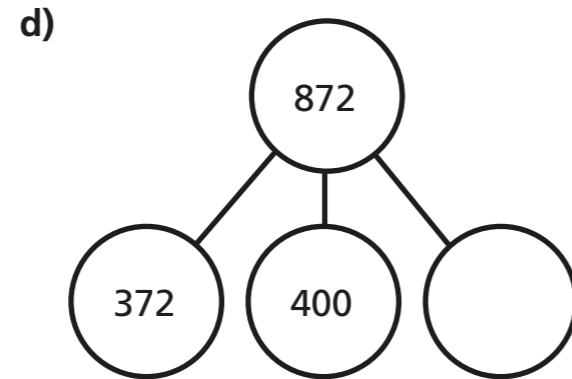
What patterns do you notice?

4 Complete the part-whole models.





What patterns do you notice?



5 Complete the number sentences.

a) $148 + \square = 648$

b) $397 - \square = 197$

c) $789 + \square = 989$

d) $\square + 517 = 917$

e) $\square - 200 = 408$

f) $\square - 900 = 24$

g) $\square + 400 = 849$

h) $728 = \square + 328$

i) $918 - \square = 818$

j) $\square + 200 = 299$

6 Eva and Tommy are working out calculations.

I started with 731 and subtracted 300

Eva

I started with 231 and added on some hundreds.

Tommy

Eva and Tommy finish with the same number.

How many hundreds did Tommy add on?

7 Scott sells cakes.
He starts with 295 cakes.



a) On Monday Scott bakes 400 more cakes and sells 100 cakes.

How many cakes does he have at the end of Monday?

b) On Tuesday he bakes 300 cakes.

At the end of Tuesday, he has 195 cakes left.

How many cakes does Scott sell?

8 Dora wants to buy a new computer.
She has saved £287
Each month she saves another £100



How many more months will it take Dora to save enough to buy the computer?