


Describing Movement

Describing Movement

4a. Cai thinks that if the hedgehog moves 3 squares down, it will find the grass.

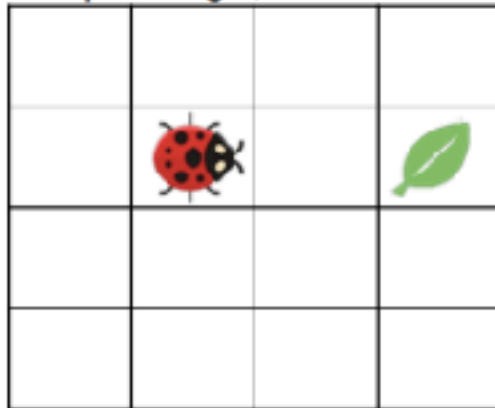


Is he correct? Explain how you know.



PS

4b. Genie thinks that if the ladybird moves 2 squares right, it will find the leaf.




Is she correct? Explain how you know.




PS

5a. Write statements using forwards, backwards, left and right to describe how each creature can get to the leaves.



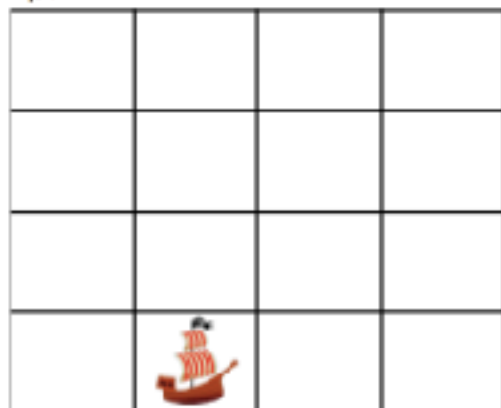
PS

5b. Write statements using forwards, backwards, left and right to describe how each creature can get to the grass.



PS

6a. The treasure is buried 2 squares left of the ship.

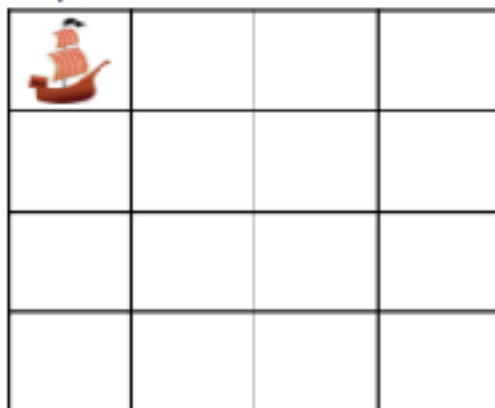


Where is the treasure buried?



PS

6b. The treasure is buried 3 squares right of the ship.



Where is the treasure buried?



PS

Answers

Expected

4a. Cai is incorrect. The hedgehog should move three squares right to find the grass.

5a. Various possible answers, for example: The ladybird moves two squares right and the spider moves two squares left.

6a.



Expected

4b. Genie is incorrect. The ladybird should move two squares forwards to find the leaf.

5b. Various possible answers, for example: The snail moves two squares left and the wasp moves three squares right.

6b.

