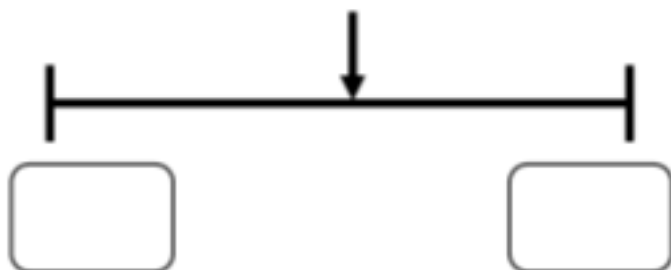


Using Rounding to Estimate Money

9a. Which whole pounds does the given amount come between?

£39.67



Round the amount to the nearest pound.

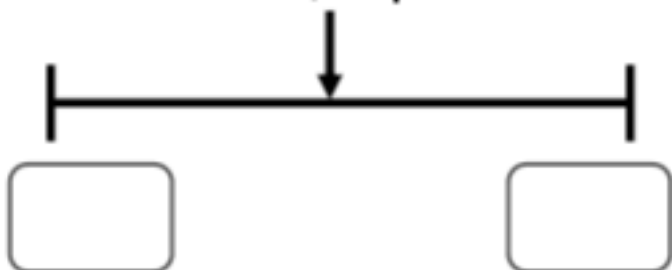


VF

Using Rounding to Estimate Money

9b. Which whole pounds does the given amount come between?

5,552p



Round the amount to the nearest pound.



VF

10a. Match the amounts to the letters on the number line.

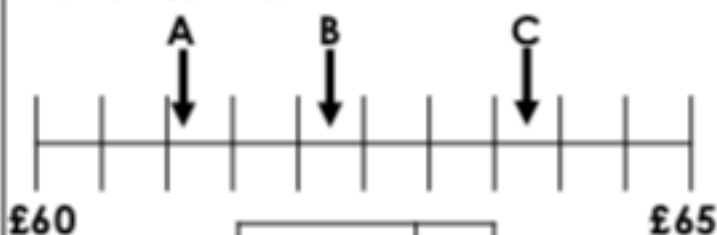


4,560p	
4,640p	
£45.30	



VF

10b. Match the amounts to the letters on the number line.



£63.75	
6,115p	
6,225p	



VF

11a. Match the items to the rounded totals.

A + £1.359p + £15.49 **£22.00**

B + £1.087p + £11.38 **£26.00**

C + £14.46 + 1,222p **£29.00**



VF

11b. Match the items to the rounded totals.

A + £23.57 + 1,717p **£41.00**

B + £18.35 + 2,989p **£44.00**

C + 2,148p + 2,276p **£48.00**



VF

12a. Amanda wants to buy a pair of shoes which cost £37.57, a bag which costs 1,122p and a hat which costs 1,278p. Which whole pound does each amount round to?

12b. Kai buys a skateboard which costs 2,865p, a helmet which costs £18.45 and knee pads which cost 1,566p. Which whole pound does each amount round to?