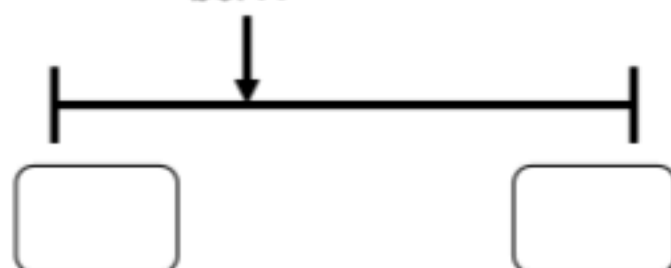


## Using Rounding to Estimate Money

5a. Which whole pounds does the given amount come between?

£8.41



Round the amount to the nearest pound.

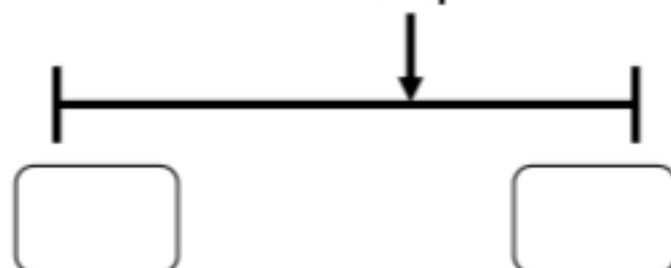


VF

## Using Rounding to Estimate Money

5b. Which whole pounds does the given amount come between?

376p

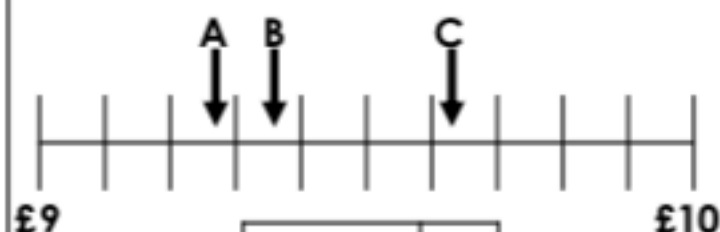


Round the amount to the nearest pound.



VF

6a. Match the amounts to the letters on the number line.

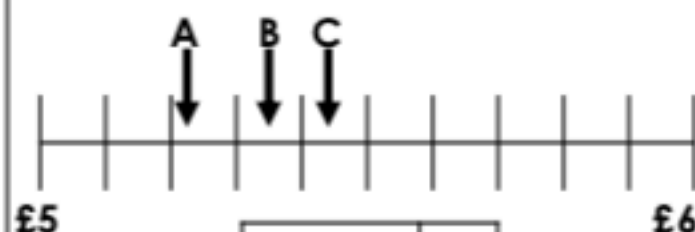


£9.62	
937p	
£9.28	



VF

6b. Match the amounts to the letters on the number line.



£5.34	
£5.43	
522p	



VF

7a. Match the items to the rounded totals.

A	 + 	£5.00
	690p + £1.08	
B	 + 	£7.00
	150p + £3.26	
C	 + 	£8.00
	£5.85 + 55p	



VF

7b. Match the items to the rounded totals.

A	 + 	£7.00
	79p + £7.19	
B	 + 	£8.00
	£1.76 + £7.45	
C	 + 	£9.00
	£2.34 + 468p	



VF

8a. Jenny wants to buy a new game which costs £5.13 and a new book which costs £3.82. Which whole pound does each amount round to?

She has £12.00.  
How much change will she receive approximately?



VF

8b. Leroy buys a new bike helmet which costs 365p and a new bike lock which costs £5.45. Which whole pound does each amount round to?

He has £15.00.  
How much change will he receive approximately?



VF