

Concept: Statistics

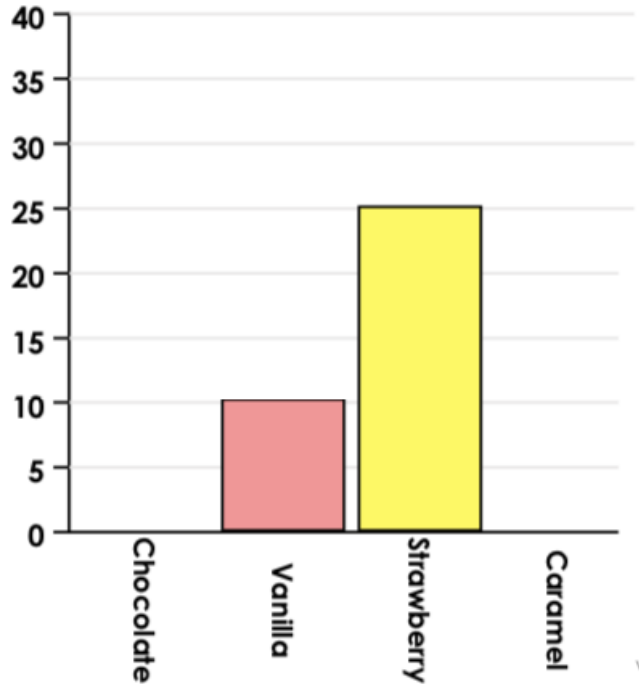
Skill: I can interpret and present data using bar charts, tables and pictograms.

SMALL STEP: Bar Charts (VF)

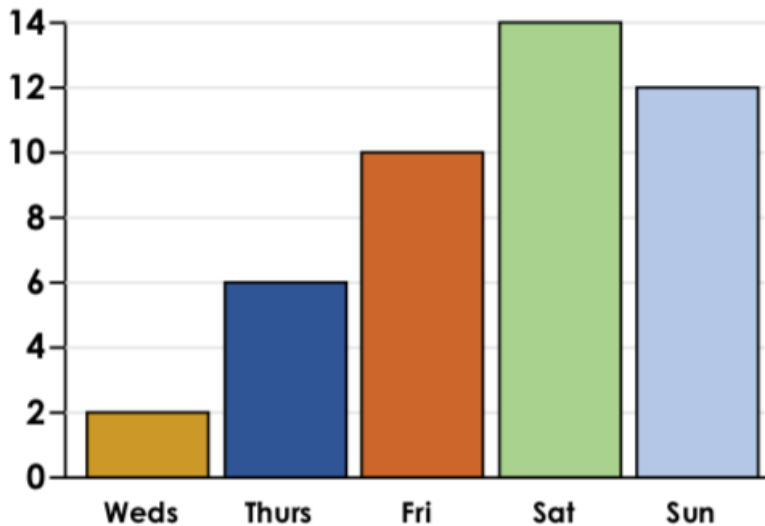
1. Use the information to complete the pictogram and the bar chart.

Ice cream	Number of children
Chocolate	🍷🍷🍷🍷
Vanilla	
Strawberry	
Caramel	🍷🍷

🍷 = 10 children



2. Use this bar chart to answer the questions about the number of diners in a restaurant.



- A. How many diners are there on Thursday?
- B. How many fewer diners are there on Wednesday compared to Sunday?
- C. How many diners are there at the weekend?
- D. How many diners are there in total?

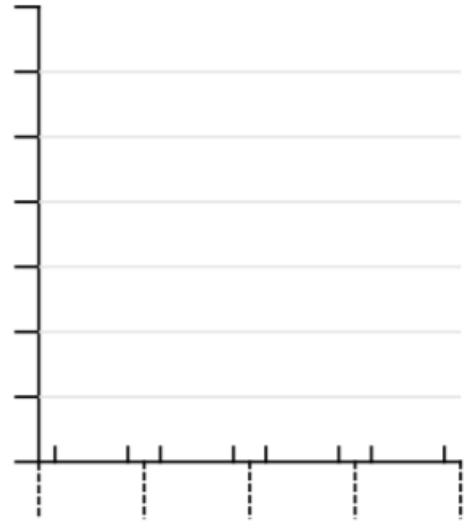
Concept: Statistics

Skill: I can interpret and present data using bar charts, tables and pictograms.

SMALL STEP: Bar Charts (VF)

3. Create a bar chart using this tally chart.
Use a scale of 2 and add in the labels.

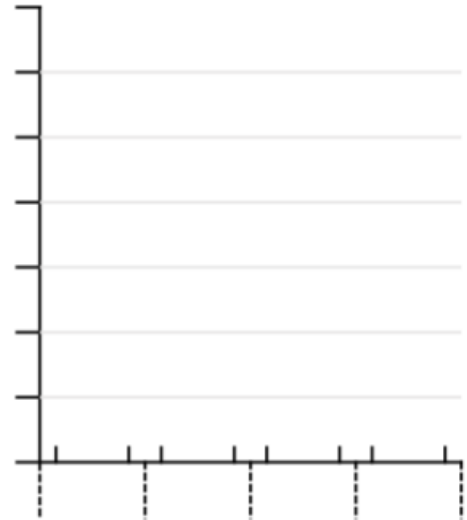
Favourite Sports	Number of children
Swimming	II II
Football	II II II
Rugby	II II III
Golf	II I



VF

4. Create a bar chart using this tally chart.
Use a scale of 5 and add in the labels.

Favourite TV shows	Number of children
Drama	II
Comedy	II II II II II
Cartoons	II II II
News	II



VF